
















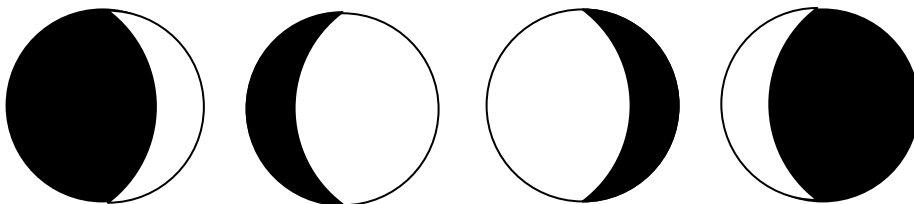
Name _____ Score _____

Drawing the Phases of the Moon

Over the next fifteen nights, you are going to go outside and look at the Moon. In the table below, draw what you see, coloring the part of the moon you can't see black (if cloudy, right "cloudy" across the face of the moon).

Date: Oct 1 st	Date: Oct 2 nd	Date: Oct 3 rd	Date: Oct 4 th	Date: Oct 5 th
				
Date: Oct 6 th	Date: Oct 7 th	Date: Oct 8 th	Date: Oct 9 th	Date: Oct 10 th
				
Date: Oct 11 th	Date: Oct 12 th	Date: Oct 13 th	Date: Oct 14 th	Date: Oct 15 th
				

Draw your picture like the examples below (the lit part of the moon is white, the part you can't see should be colored black):



This assignment will be due on Monday, October 20th.